

Name: _____

Grade & Section: _____

Date: _____

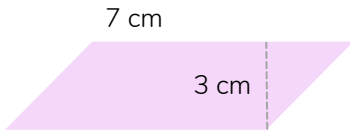
Time: _____



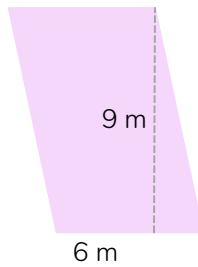
hunterswoodspah

Area of a Parallelogram

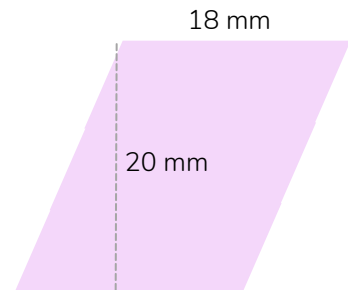
Find the area of each parallelogram below.



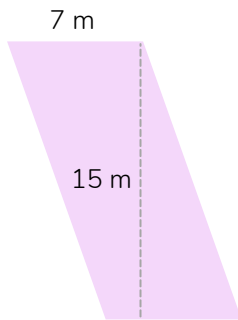
AREA: _____



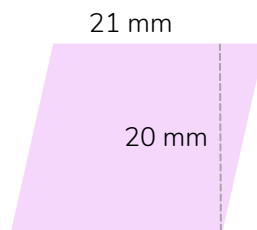
AREA: _____



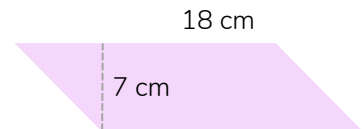
AREA: _____



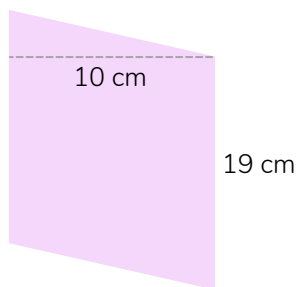
AREA: _____




AREA: _____



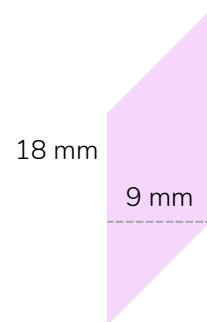
AREA: _____



AREA: _____



AREA: _____



AREA: _____