



NAME _____

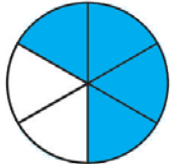

DATE _____

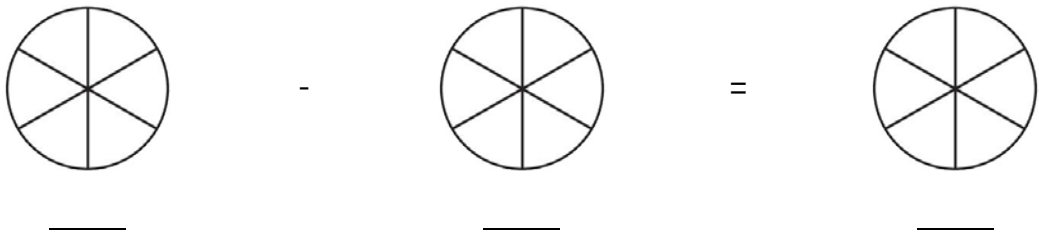
GRADE & SECTION _____

TIME _____

HUNTER'S WOODS TOPIC: FRACTION SUBTRACTION – DIFFERENT DENOMINATORS

INSTRUCTION: Find the difference of the fractions below.

1.  - 
 $\frac{4}{6}$ - $\frac{1}{3}$



2.  - 
 $\frac{2}{3}$ - $\frac{1}{4}$

