



NAME \_\_\_\_\_

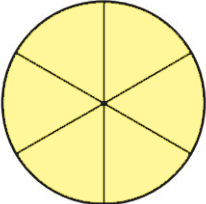
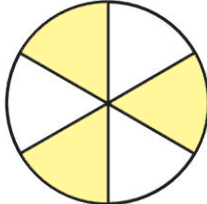
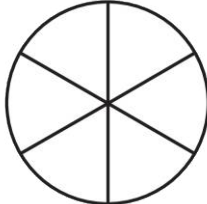
DATE \_\_\_\_\_

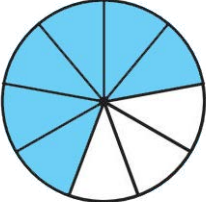
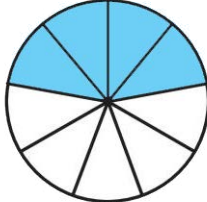

GRADE & SECTION \_\_\_\_\_

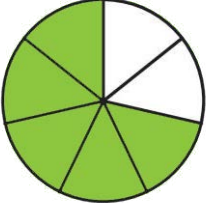


TIME \_\_\_\_\_

**HUNTER'S WOODS** TOPIC: FRACTION SUBTRACTION – SAME DENOMINATORS

INSTRUCTION: Find the difference of the fractions below by shading the circle and writing the correct numerator.

1.  -  =   
 $\frac{6}{6}$                        $\frac{3}{6}$                        $\frac{\quad}{6}$

2.  -  =   
 $\frac{6}{9}$                        $\frac{4}{9}$                        $\frac{\quad}{9}$

3.  -  =   
 $\frac{5}{7}$                        $\frac{2}{7}$                        $\frac{\quad}{7}$