



NAME \_\_\_\_\_

DATE \_\_\_\_\_



GRADE & SECTION \_\_\_\_\_

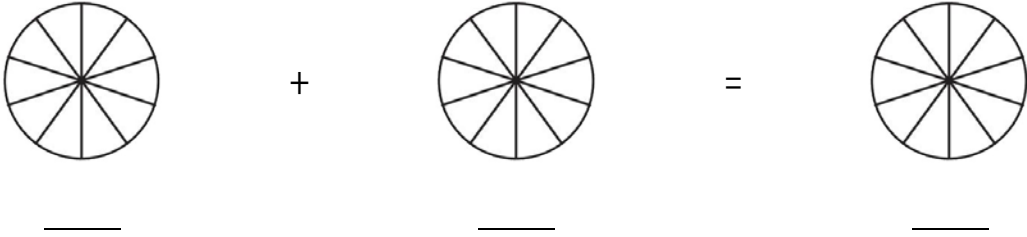
TIME \_\_\_\_\_


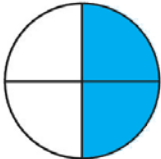
**HUNTER'S WOODS** TOPIC: FRACTION ADDITION – DIFFERENT DENOMINATORS

---

INSTRUCTION: Find the sum of the fractions below.

1.  +   
 $\frac{1}{2}$  +  $\frac{1}{5}$



2.  +   
 $\frac{1}{3}$  +  $\frac{2}{4}$

