



NAME _____


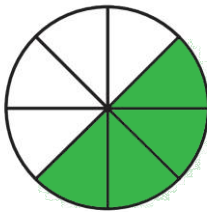
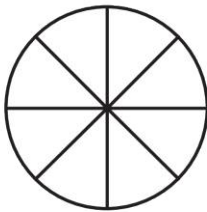
DATE _____


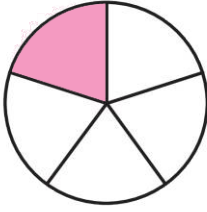

GRADE & SECTION _____



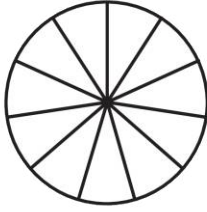
TIME _____

HUNTER'S WOODS TOPIC: FRACTION ADDITION – SAME DENOMINATORS

INSTRUCTION: Find the sum of the fractions below by shading the circle and writing the correct numerator.

1.  +  = 
 $\frac{3}{8}$ $\frac{4}{8}$ $\frac{\quad}{8}$

2.  +  = 
 $\frac{2}{5}$ $\frac{1}{5}$ $\frac{\quad}{5}$

3.  +  = 
 $\frac{4}{11}$ $\frac{3}{11}$ $\frac{\quad}{11}$