



NAME _____

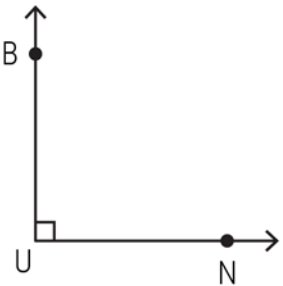
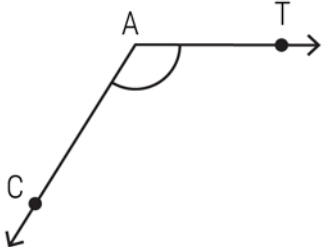
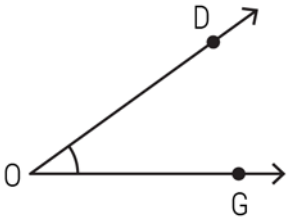
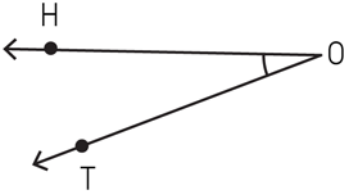
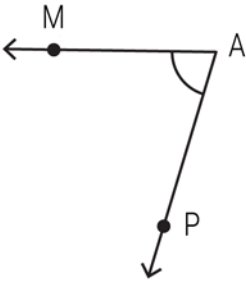
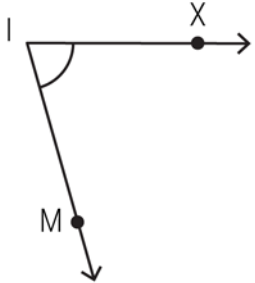
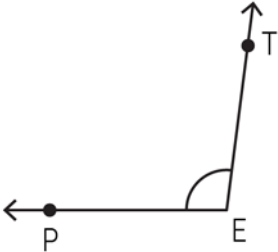
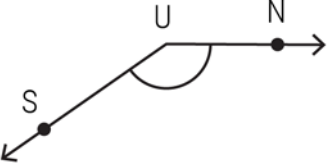
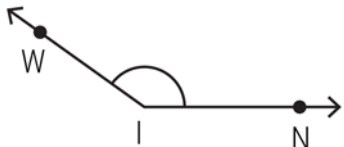
DATE _____

GRADE & SECTION _____

TIME _____

HUNTER'S WOODS TOPIC: PARTS OF AN ANGLE: IDENTIFYING THE VERTEX AND ARMS

INSTRUCTION: Identify the vertex and arms that form each angle.

 <p>Vertex: <u>U</u> Arms: <u>UB, UN</u></p>	 <p>Vertex: _____ Arms: _____</p>	 <p>Vertex: _____ Arms: _____</p>
 <p>Vertex: _____ Arms: _____</p>	 <p>Vertex: _____ Arms: _____</p>	 <p>Vertex: _____ Arms: _____</p>
 <p>Vertex: _____ Arms: _____</p>	 <p>Vertex: _____ Arms: _____</p>	 <p>Vertex: _____ Arms: _____</p>