



NAME \_\_\_\_\_










DATE \_\_\_\_\_

GRADE & SECTION \_\_\_\_\_

TIME \_\_\_\_\_

**HUNTER'S WOODS** TOPIC: PARTS OF A CIRCLE

INSTRUCTION: Draw on the circles below to illustrate the parts of the circle.

 <p>radius</p>	 <p>diameter</p>	 <p>chord</p>
 <p>arc</p>	 <p>semicircle</p>	 <p>circumference</p>
 <p>sector</p>	 <p>segment</p>	 <p>tangent</p>